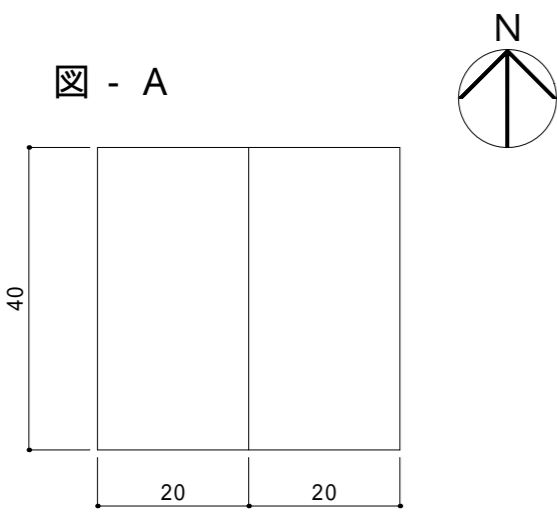
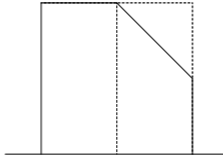
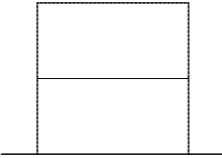

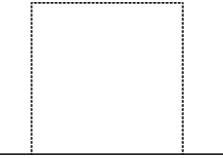
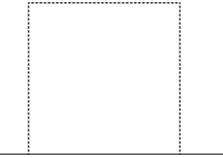
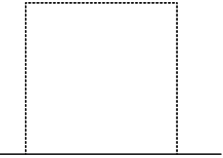
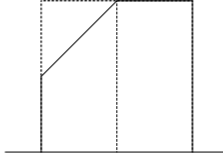




































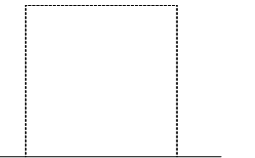


<p>図 - A</p>  <p>40</p> <p>20 20</p> <p>平面図</p>	<p>(例)</p>  <p>南側立面図</p>	 <p>東側立面図</p>	<p>(1)</p>  <p>南側立面図</p>	 <p>東側立面図</p>	<p>(2)</p>  <p>南側立面図</p>	 <p>東側立面図</p>	
	 <p>北側立面図</p>	 <p>西側立面図</p>	 <p>北側立面図</p>	 <p>西側立面図</p>	 <p>北側立面図</p>	 <p>西側立面図</p>	
<p>(3)</p>  <p>南側立面図</p>	 <p>東側立面図</p>	<p>(4)</p>  <p>南側立面図</p>	 <p>東側立面図</p>	<p>(5)</p>  <p>南側立面図</p>	 <p>東側立面図</p>	<p>(6)</p>  <p>南側立面図</p>	 <p>東側立面図</p>
 <p>北側立面図</p>	 <p>西側立面図</p>	 <p>北側立面図</p>	 <p>西側立面図</p>	 <p>北側立面図</p>	 <p>西側立面図</p>	 <p>北側立面図</p>	 <p>西側立面図</p>
<p>(7)</p>  <p>南側立面図</p>	 <p>東側立面図</p>	<p>(8)</p>  <p>南側立面図</p>	 <p>東側立面図</p>	<p>(9)</p>  <p>南側立面図</p>	 <p>東側立面図</p>	<p>(10)</p>  <p>南側立面図</p>	 <p>東側立面図</p>
 <p>北側立面図</p>	 <p>西側立面図</p>	 <p>北側立面図</p>	 <p>西側立面図</p>	 <p>北側立面図</p>	 <p>西側立面図</p>	 <p>北側立面図</p>	 <p>西側立面図</p>
<p>(課題) 別紙で考えた10種類の立体をもとに、それぞれの立体の東西南北における立面図を描きなさい。 <(例)参照></p>	<p>表題 立方体の造形</p>	<p>学校名 山梨県立甲府工業高等学校</p>					
	<p>図名 立面図</p>	<p>尺度 1:2</p>	<p>科年番 建築科1年番</p>	<p>氏名</p>			